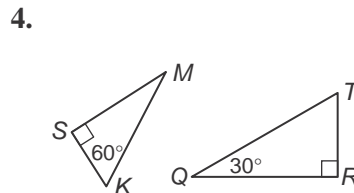
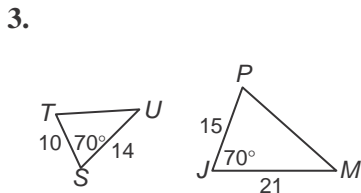
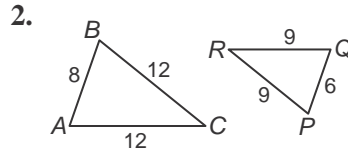
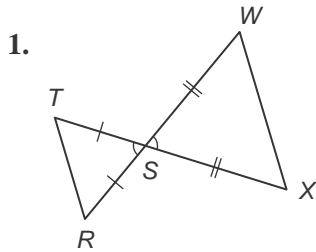


7-3 Skills Practice

Similar Triangles

Determine whether each pair of triangles is similar. If so, write a similarity statement. If not, what would be sufficient to prove the triangles similar?

Explain your reasoning.



ALGEBRA Identify the similar triangles. Then find each measure.

