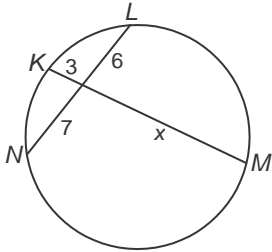


10-7 Skills Practice

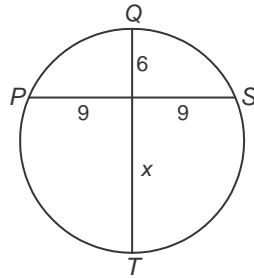
Special Segments in a Circle

Find x to the nearest tenth if necessary. Assume that segments that appear to be tangent are tangent.

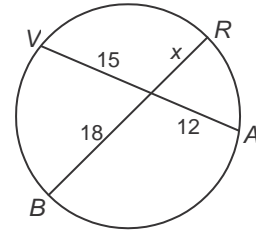
1.



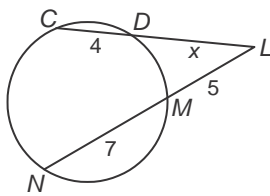
2.



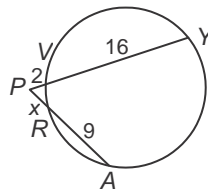
3.



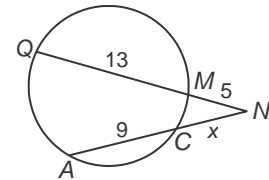
4.



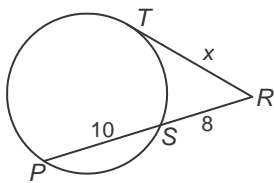
5.



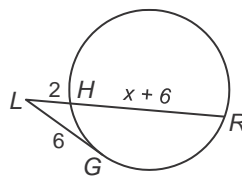
6.



7.



8.



9.

