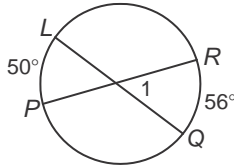


# 10-6 Skills Practice

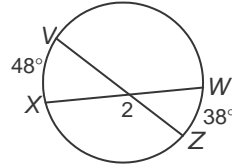
## Secants, Tangents, and Angle

Find each measure. Assume that segment that appear to be tangent are tangent.

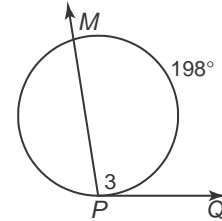
1.  $m\angle 1$



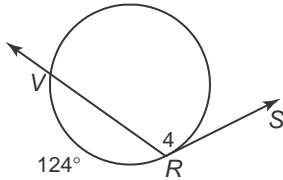
2.  $m\angle 2$



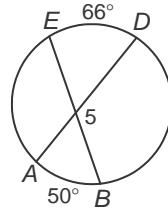
3.  $m\angle 3$



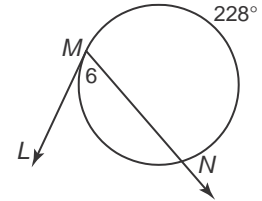
4.  $m\angle 4$



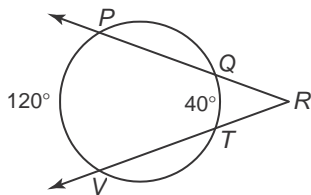
5.  $m\angle 5$



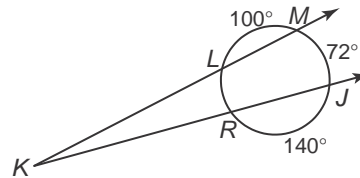
6.  $m\angle 6$



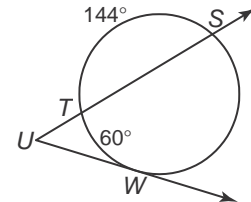
7.  $m\angle R$



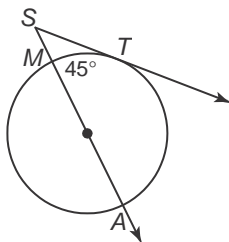
8.  $m\angle K$



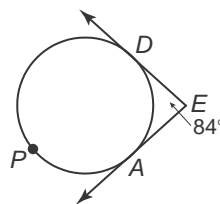
9.  $m\angle U$



10.  $m\angle S$



11.  $m\widehat{DPA}$



12.  $m\widehat{LJ}$

