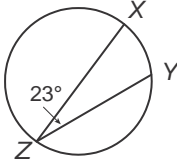


# 10-4 Skills Practice

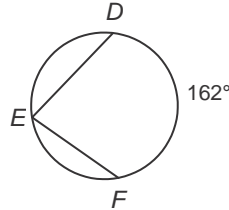
## Inscribed Angles

Find each measure.

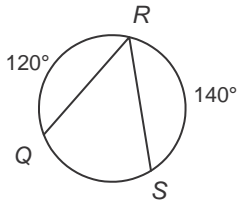
1.  $m\widehat{XY}$



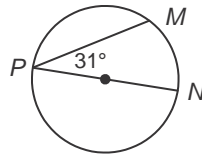
2.  $m\angle E$



3.  $m\angle R$

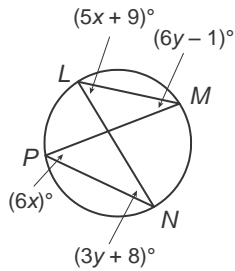


4.  $m\widehat{MP}$

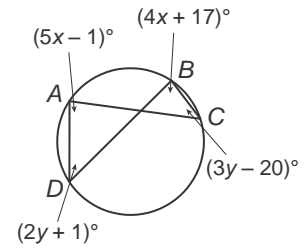


**ALGEBRA** Find each measure.

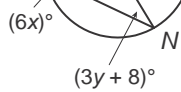
5.  $m\angle N$



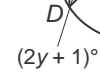
7.  $m\angle C$



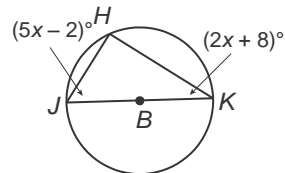
6.  $m\angle L$



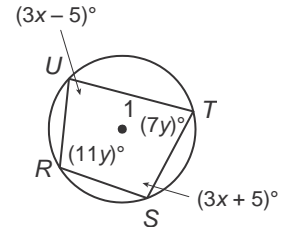
8.  $m\angle A$



9.  $m\angle J$



11.  $m\angle S$



10.  $m\angle K$

12.  $m\angle R$